



Purnima International School

Shree Swaminarayan Gurukul, Zundal

PA- 3 QUSTION BANK [2022-23]

STUDENT NAME

SUBJECT - MATHS

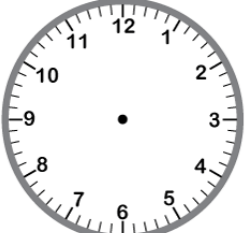
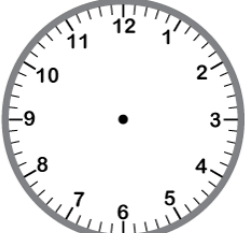
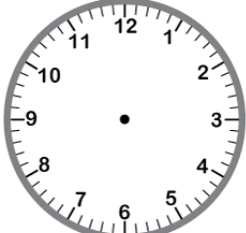
GRADE - 1

ROLL NO. -



Q1. Fill in the blanks

- 1 minute = _____ Seconds.
- 1 week = _____ days
- After Monday _____ come.
- After Saturday _____ come.
- Unit of length Is _____.
- Unit of weight is _____.
- Unit of capacity is _____.
- 31, 32, __, 34, __ 36.
- 45, __, 47, __ 49, 50
- 21, 22, __, __, 25

Q2. Identify the correct time


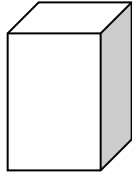
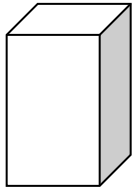
 <p>10 O'clock</p>	 <p>5 O'clock</p>	 <p>9 O'clock</p>
---	--	--

Q3A. Circle the shortest


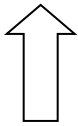
- 
- 

Q3B. Circle the taller

a)



b)



Q4. write the number names

- | | |
|---------------|---------------|
| a. 21 - _____ | e. 40 - _____ |
| b. 32 - _____ | f. 23 - _____ |
| c. 44 - _____ | g. 38 - _____ |
| d. 50 - _____ | h. 45 - _____ |

Q5. Choose the correct option and (✓) tick it

- i. How many days in a week?
a.14 b.7 c.4
- ii. How many months in a year ?
a.14 b.10 c.12
- iii. What is the unit of weight?
a. Gram b. Meter c. Liter
- iv. 1 day is equal to how many hours?
a.12 b.7 c. 24
- v. After Saturday which day has to come?
a. Sunday b.Monday c. Friday
- vi. Who is the tallest animal?

a. Cat

b. Rat

c. Giraffe

vii. 1 Hour = _____ minutes.

a. 20

b. 60

c. 45

viii. 1 year = _____ days.

a. 365

b. 360

c. 320

ix. After May _____ month is come.

a. June

b. July

c. April

Q6a. Add the following numbers.

$$\begin{array}{r} 20 \\ + 16 \\ \hline \hline \end{array}$$

$$\begin{array}{r} 16 \\ + 11 \\ \hline \hline \end{array}$$

$$\begin{array}{r} 30 \\ + 13 \\ \hline \hline \end{array}$$

Q6b. subtract and write answer

$$\begin{array}{r} 36 \\ - 24 \\ \hline \hline \end{array}$$

$$\begin{array}{r} 65 \\ - 13 \\ \hline \hline \end{array}$$

$$\begin{array}{r} 68 \\ - 04 \\ \hline \hline \end{array}$$

Q7. Draw the bundles and ones

a. 15		b. 19	
c. 20		d. 37	
e. 42		f. 22	